

I Have, Who Has?

MATH

1-2

Written by
Trisha Callella

Editor: Jennifer Busby

Cover Illustrator: Priscilla Burris

Production: Carlie Hayashi

Cover Designer: Barbara Peterson

Art Director: Moonhee Pak

Managing Editor: Betsy Morris, Ph.D.

© 2007 Creative Teaching Press Inc., Huntington Beach, CA 92649

Reproduction of activities in any manner for use in the classroom and not for commercial sale is permissible.




Reproduction of these materials for an entire school or for a school system is strictly prohibited.

Table of Contents







Introduction	4
Getting Started	5


NUMBER SENSE


 One More — Game A: Numbers < 100	7
 One More — Game B: Numbers > 100	12
 One Less — Game A: Numbers < 100	17
 One Less — Game B: Numbers > 100	22
 One More, One Less Review Game	27
 Two More, Five More Game: Numbers \leq 50	32
 Two Less, Five Less Game: Numbers \leq 50	37
 Ten More — Game A: Numbers < 100	42
 Ten More — Game B: Numbers > 100	47
 Ten Less — Game A: Numbers < 100	52

 Ten Less — Game B: Numbers > 100	57
 Comparing Numbers Game	62
 Doubles and Doubles + 1 Game	67

OPERATIONS


 Addition — Game A: Two Terms and All Sums < 50	72
 Addition — Game B: Three Terms, Using Doubles, and All Sums < 100	77
 Commutative Property of Addition Game	82
 Subtraction — Game A: Two Terms and All Differences < 50	87
 Subtraction — Game B: Two Terms and All Differences < 100	92
 Fact Families — Game A: Identify the 2 Missing Subtraction Facts	97

 Fact Families — Game B:
Identify the 2 Missing
Addition Facts.102


 Multiplication: Making
Groups Game107


ALGEBRAIC THINKING

 Patterns — Game A:
Extend the Pattern.112

 Patterns — Game B:
What Is Missing?117

PLACE VALUE

 Guess My Number: Clues
with Even/Odd, $</>$, and
Place Value Game122


 Place Value — Game A:
Combine Tens and Ones
into a Number.127


 Place Value — Game B:
Adding Tens and Ones.132

 Place Value — Game C:
Practice on the Hundred Chart137


 Place Value — Game D:
Regrouping142


MEASUREMENT

 Time — Game A: Basic Concepts,
 $\frac{1}{2}$ Hour, Hour, and Elapsed
Time to $\frac{1}{2}$ Hour and Hour147

 Time — Game B: $\frac{1}{4}$ Hour,
 $\frac{1}{2}$ Hour, $\frac{3}{4}$ Hour, and Hour
with Elapsed Time.152

 Time — Game C: Calendar157


 Money — Game A: Coin
Identification, Values, and
Counting Money Under \$1.00. . . .163

 Money — Card B: Counting
Money with Coins and Dollars. . . .168

 Units of Length, Capacity,
Weight, and Time Game173

DATA ANALYSIS

 Data Analysis — Game A:
Bar and Pie Graphs178

 Data Analysis — Game B:
Reading a Table184

PROBLEM SOLVING

 Word Problems Game190

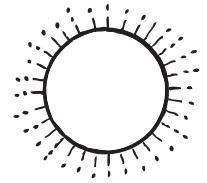
Blank Card Template.195

Blank Reproducible Enrichment Activity Pages.196

Answer Key198

Name _____ Date _____

One More — Game A




I Lightly color each number that matches your classmates' answers.

1	2	3	4	5	6	7	8	9	10
11	12	13	14	15	16	17	18	19	20
21	22	23	24	25	26	27	28	29	30
31	32	33	34	35	36	37	38	39	40
41	42	43	44	45	46	47	48	49	50
51	52	53	54	55	56	57	58	59	60
61	62	63	64	65	66	67	68	69	70
71	72	73	74	75	76	77	78	79	80
81	82	83	84	85	86	87	88	89	90
91	92	93	94	95	96	97	98	99	100

II Choose 10 numbers from the hundred chart that you did **not** color. Write the numbers in the chart below. Rewrite **each** number as **one more**.

Number from the 100 Chart										
One More										



One More — Game B

I have the **first card**.

Who has the number
that is **one more** than **110**?

I have **171**.

Who has the number
that is **one more** than **109**?

I have **111**.

Who has the number
that is **one more** than **115**?

I have **110**.

Who has the number
that is **one more** than **189**?

I have **116**.

Who has the number
that is **one more** than **154**?

I have **190**.


Who has the number
that is **one more** than **112**?

I have **155**.

Who has the number
that is **one more** than **170**?

I have **113**.

Who has the number
that is **one more** than **149**?



Name _____ Date _____

One More — Game B

I Write each number from left to right as your classmates say the answers.

*Start →							

II Choose 12 numbers from the chart above. Write the numbers in the chart below. Rewrite **each** number as **one more**.

Number from the Chart	One More

Number from the Chart	One More